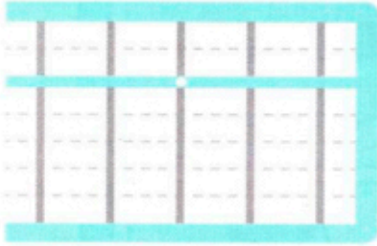


# Ábaco Soroban

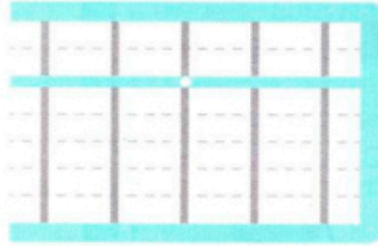
## SUMAS COMPLEJAS II

Resuelve estas sumas con tu ábaco y representa la solución.

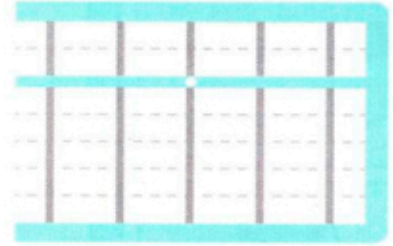
$195 + 1.346$



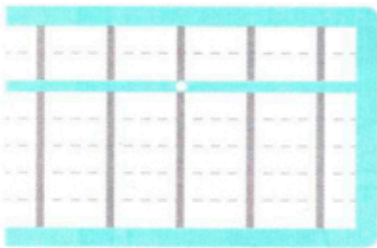
$273 + 165$



$4.689 + 5.264$



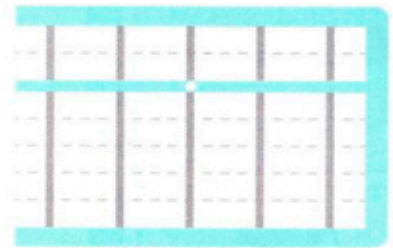
$83 + 27$



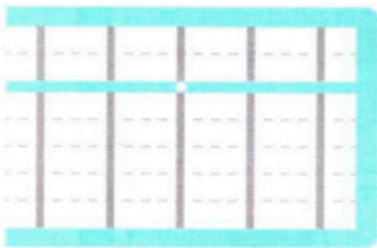
$235 + 247$



$3.184 + 5.376$



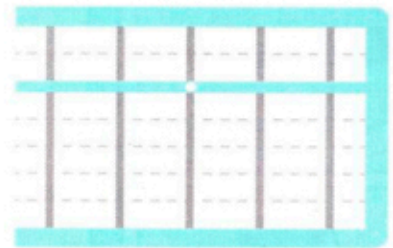
$184 + 338$



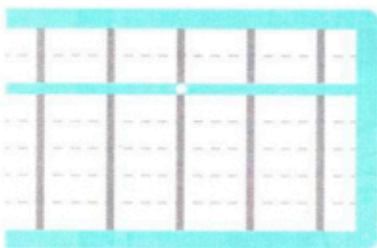
$1.507 + 3.478$



$2.459 + 6.186$



$736 + 259$



$365 + 19$



$125 + 2.799$

